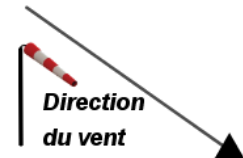
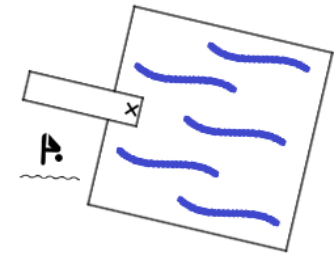
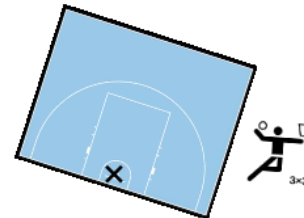

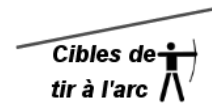
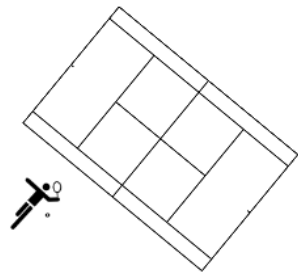


Énigme 3 - Où est Charlie ?

	1	2	3	4	5	6	7	8	9	10	11	12	13	14	15	16	17	18	19	20	21	22	23	24	25	26	27	28
A																												
B																												
C																												
D																												
E																												
F																												
G																												
H																												



Pour toute utilisation du vidéoprojecteur, s'assurer que les cases de la grille soient bien carrées pour garantir la bonne correspondance des tracés.

[Télécharger au format Geogebra](#)