

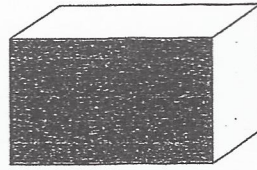


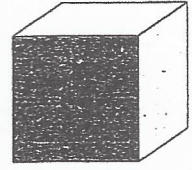
# Rectificatif


1 Nomme chaque solide.










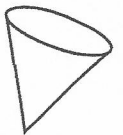
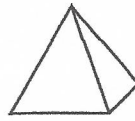
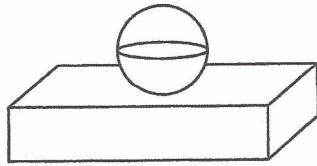
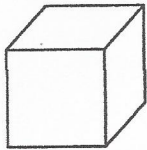




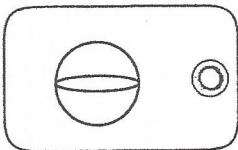




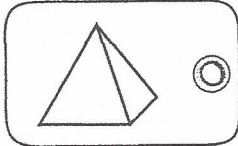
2 Colorie les polyèdres.



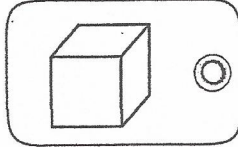
3 Relie chaque solide à son étiquette.



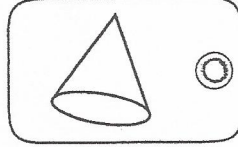
J'ai 2 faces ~~ronde~~ <sup>planes</sup> et je ne suis pas un polyèdre.



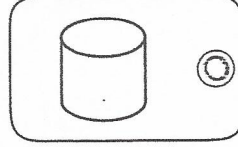
Je suis un polyèdre. Toutes mes faces sont des carrés.



Je suis un polyèdre. 4 de mes faces sont des triangles.



Je ne suis pas un polyèdre et j'ai une face ~~ronde~~ <sup>plane</sup>.



Je n'ai pas de surface plane. Je ne suis pas un polyèdre.

